















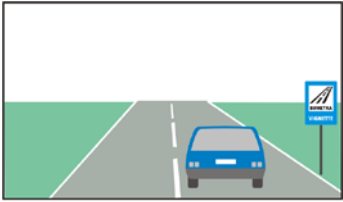







































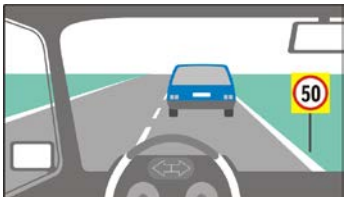

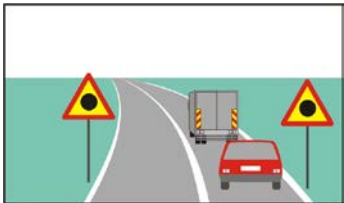





## Theme: 2. THE ROADS AND STREETS ON WHICH WE MOVE










points	K	№	Question, answers	Figure
2		2/1.0	<p><b>The meaning of this road sign is:</b>  <b>a priority road</b>                      cross if the road is free                      give way to the road vehicles from the opposite traffic                      attention, a road junction</p>	
2		2/1.1	<p><b>Which of the signs indicates that you are driving on a priority road?</b></p> <p>     </p> <p>a.                      b.                      c.                      d.</p>	
2		2/2.	<p><b>Which of the signs means "End of the priority road"?</b></p> <p>     </p> <p>a.                      b.                      c.                      d.</p>	
2		2/3.0	<p><b>The number of a road, according to the international classification is designated with:</b></p> <p>    </p> <p>a.                      b.                      c.</p>	
2		2/3.1	<p><b>The number of a highway according to the International classification is designated with:</b></p> <p>    </p> <p>a.                      b.                      c.</p>	
2		2/4.0	<p><b>This road sign indicates:</b>  <b>that the use of the road requires a paid vignette fee</b>                      two-way traffic after the sign                      automobile road                      the number of the road lanes in one direction</p>	
2		2/4.1	<p><b>In this situation, the road sign indicates that:</b>  <b>the use of the road requires a paid vignette fee</b>                      the marking that separates the road lanes permits crossing                      both road lanes are designated for driving in one direction</p>	
2		2/5.0	<p><b>This road sign warns about:</b>  <b>a dangerous right turn</b>                      the risk of a road vehicle turning right off the road                      a road junction, where you should mandatorily turn to the right                      a parking area by the road</p>	





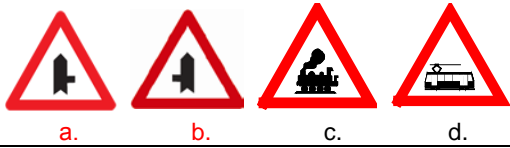

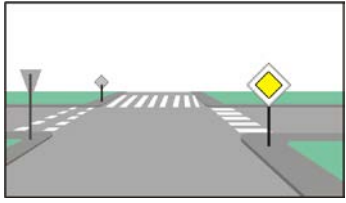
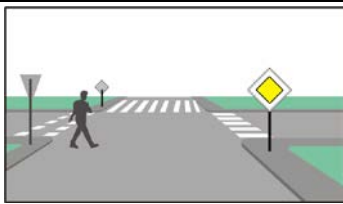
2	2/5.1	<p><b>This road sign warns about:</b>  a dangerous left turn  the risk of a road vehicle leaving the off the road  a road junction, where you should mandatorily turn to the left  a dangerous slope of the road</p>	
2	2/6.0	<p><b>This road sign warns about:</b>  series of dangerous curves, the first of which is to the left  series of steep ascents and descents  danger of slipping  an obstacle that must be bypassed on the left</p>	
2	2/6.1	<p><b>This road sign warns about:</b>  series of dangerous curves, the first of which is to the right  series of steep ascents and descents  danger of slipping  an obstacle that must be bypassed on the right</p>	
2	2/7.0	<p><b>Which of the road signs warns that you will enter a dangerous turn?</b></p> <p> a.  b.  c.  d.</p>	
2	2/7.1	<p><b>Which of the road signs warns that you will enter a dangerous turn?</b></p> <p> a.  b.  c.  d.</p>	
2	2/7.2	<p><b>Which of the road signs warns that you will enter a dangerous turn?</b></p> <p> a.  б.  B.  Г.</p>	
2	2/7.3.	<p><b>Which of the road signs warns that you will enter a dangerous turn?</b></p> <p> a.  б.  B.  Г.</p>	
2	2/8.0	<p><b>How does the vehicle stability change if, when entering a turn, the driver increases the speed?</b></p> <p>it deteriorates  it improves  it does not change</p>	
2	2/8.1	<p><b>When entering a turn, the increase of the speed improves the stability of the vehicle.</b></p> <p>incorrect  correct</p>	
2	2/8.2	<p><b>When entering a turn, the increase of the speed deteriorates the stability of the vehicle.</b></p> <p>correct  incorrect</p>	

2		2/9.	<p><b>When a vehicle makes a turn at a high speed, the most dangerous is:</b></p> <p>the possible lateral sliding of the vehicle</p> <p>the accelerated improper wearing of the tire tread</p> <p>the accelerated wearing of the steering system</p> <p>the accelerated wearing of the suspension</p>	
2		2/10.0	<p><b>When a vehicle makes a turn, does the radius of the turn affect the stability of the vehicle?</b></p> <p>yes</p> <p>no</p>	
2		2/10.1	<p><b>How does the vehicle stability change, when making a turn with the turning radius reducing?</b></p> <p>it deteriorates</p> <p>it improves</p> <p>it does not change</p>	
2		2/11.0	<p><b>This road sign warns about:</b></p> <p>a dangerous roadside</p> <p>a slippery road section</p> <p>bumps on the road</p> <p>the way of parking</p>	
2		2/11.1	<p><b>Which road sign warns about a dangerous roadside?</b></p> <p> a.</p> <p> b.</p> <p> c.</p> <p> d.</p>	
2		2/12.0	<p><b>This road sign warns of approaching:</b></p> <p>a driveway, narrowed at both sides</p> <p>a bridge</p> <p>a tunnel</p> <p>a facility for emergency stop</p>	
2		2/12.1	<p><b>This road sign warns about:</b></p> <p>narrowing of the driveway from the left</p> <p>change in the road slope</p> <p>insertion of a road lane on the left</p> <p>dangerous roadside on the left</p>	
2		2/12.2	<p><b>This road sign warns about:</b></p> <p>narrowing of the driveway on the right</p> <p>dangerous roadside on the right</p> <p>roadside facility on the right</p> <p>reduction of the number of the road lanes</p>	
2		2/13.0	<p><b>Which road sign warns that the driveway is narrowed from the right?</b></p> <p> a.</p> <p> b.</p> <p> c.</p> <p> d.</p>	
2		2/13.1	<p><b>Which road sign warns that the driveway is narrowed?</b></p> <p> a.</p> <p> b.</p> <p> c.</p> <p> d.</p>	

2	2/13.2	<p>Which road sign warns that the driveway is narrowed?</p>  <p>a.                      b.                      c.                      d.</p>	
2	2/13.3	<p>Which road sign warns that the driveway becomes narrow?</p>  <p>a.                      b.                      c.                      d.</p>	
2	2/13.4	<p>Which road sign warns that the driveway becomes narrow?</p>  <p>a.                      b.                      c.                      d.</p>	
2	2/14.	<p>The meaning of this road sign is:</p> <p>Attention! Other dangers</p> <p>Attention! Pedestrian crossing</p> <p>Attention! Stop!</p> <p>Attention! Children</p>	
2	2/15.0	<p>Which road sign warns about a steep slope in descending?</p>  <p>a.                      b.                      c.                      d.</p>	
2	2/15.1	<p>Which road sign warns about a steep slope in ascending?</p>  <p>a.                      b.                      c.                      d.</p>	
2	2/16	<p>Which road sign warns about a danger of slipping?</p>  <p>a.                      b.                      c.                      d.</p>	
2	2/17.0	<p>The additional outline with fluorescent yellow-green reflective background around the road sign, means that:</p> <p>the pedestrian crossing is located in a section of the road, where accidents often occur</p> <p>the pedestrian crossing is not illuminated</p> <p>after the pedestrian crossing there is a section of the road under repair</p> <p>there is an intensive traffic of pedestrians</p>	




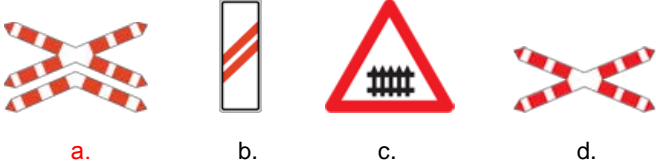


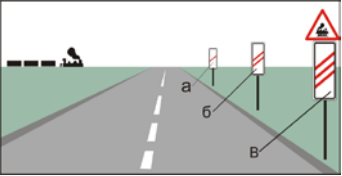
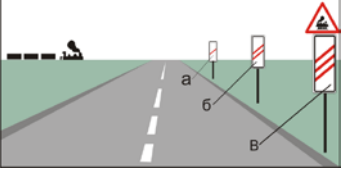
2	2/17.1	<p><b>The additional outline with fluorescent yellow-green reflective background around the road sign, means that:</b>  <i>in this section of the road accidents often occur</i>  the sign is valid only if the road is wet  a section of the road under repair follows  the restriction applies only for trucks</p>	
2	2/17.2	<p><b>In this situation, the fluorescent yellow-green reflective background, where the road sign is placed on:</b>  <i>indicates that in this road section there is a concentration of accidents</i>  indicates that overtaking is prohibited  indicates that the speed limit is observed only when making a turn  indicates that follows a section of the road under repair</p>	
2	2/18.0	<p><b>This road sign indicates:</b>  <i>that a section of the road with concentration of accidents follows</i>  that the road enters a tunnel  for a danger of rocks fallen on the road  for a section of the road under repair</p>	
2	2/18.1	<p><b>In this situation, the road signs indicate that:</b>  <i>follows a section of the road with concentration of accidents</i>  follows a section of the road under repair  there is a danger of rocks fallen on the road  after the curve, the road enters a tunnel</p>	
2	2/19.0	<p><b>This sign warns about a possible danger of:</b>  <i>people working on the driveway or in the area of the road</i>  <i>construction equipment on the driveway</i>  <i>bumps on the driveway</i>  children playing on the driveway</p>	
2	2/19.1	<p><b>After this road sign:</b>  <i>on the driveway, there may be people working</i>  <i>there are may be obstacles on the driveway</i>  the road is closed for traffic  parking is prohibited</p>	
2	2/20.	<p><b>This road sign:</b>  <i>warns that follows a section of the road under repair</i>  prohibits the performing of repair works on the road  indicates the place for loading and unloading operations on road  indicates that in this road section there is a concentration of accidents</p>	
2	2/21	<p><b>This road sign:</b>  <i>warns about the place where cyclists enter the road</i>  indicates for a section of the road on which traffic is prohibited for cyclists  indicates the beginning of the cycle lane  indicates the beginning of the path only for cyclists</p>	
2	2/22.0	<p><b>Which sign warns about bumps on the driveway?</b></p> <p style="text-align: center;">     </p> <p style="text-align: center;"> a.                      b.                      c.                      d. </p>	

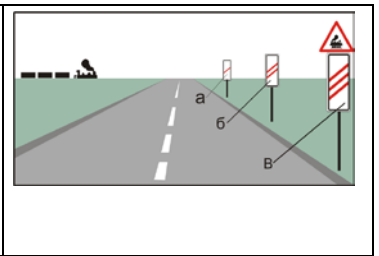
2		2/22.1	<p><b>Which sign warns about artificial bumps on the driveway?</b></p>  <p>a.                      b.                      c.                      d.</p>
2		2/23.0	<p><b>This road sign:</b>  warns about a road junction with a non-priority road  indicates that the next road junction must be crossed straight  indicates the end of the priority road  indicates the beginning of the priority road</p> 
2		2/23.1	<p><b>This road sign:</b>  warns about a road junction with a road on the right, which is a non-priority road  indicates the directions for crossing the next road junction  indicates a place for stopping by the road  indicates the widening of the driveway</p> 
2		2/23.2	<p><b>This road sign:</b>  warns about a road junction with a road on the left, which is a non-priority road  indicates the obligatory direction for crossing the next road junction  indicates the crossing of equivalent roads  indicates the place of stopping by the road</p> 
2		2/24.0	<p><b>Which road signs warn about a road junction with a road without the right of way?</b></p>  <p>a.                      b.                      c.                      d.</p>
2		2/24.1	<p><b>Which road signs warn about a road junction with a road without the right of way?</b></p>  <p>a.                      b.                      c.                      d.</p>
2		2/24.2.	<p><b>Which road sign warns about a road junction with a non-priority road?</b></p>  <p>a.                      b.                      c.                      d.</p>
2		2/25.0	<p><b>This road sign:</b>  warns about a road junction roads with an equal right of way  indicates the beginning of a road section in which the entry is prohibited  indicates a road section on which staying and parking are prohibited  indicates the end of the priority road</p> 
2		2/25.1	<p><b>Which road sign warns about approaching of a road junction of equivalent roads?</b></p>  <p>a.                      b.                      c.                      d.</p>

2	2/26.0	<p><b>This road sign warns about:</b></p> <p>a road junction with a roundabout</p> <p>a place on which you should make a U-turn</p> <p>a section of the road on which it is prohibited to make a U-turn</p> <p>a driveway island</p>	
2	2/26.1	<p><b>Which road sign warns about approaching a road junction with a roundabout?</b></p>	 <p>a.                      b.                      c.                      d.</p>
2	2/27.0	<p><b>Which road sign warns about approaching a road junction?</b></p>	 <p>a.                      b.                      c.                      d.</p>
2	2/27.1	<p><b>Which road sign warns about approaching a road junction?</b></p>	 <p>a.                      b.                      c.                      d.</p>
2	2/27.2	<p><b>Which road sign warns about approaching a road junction?</b></p>	 <p>a.                      b.                      c.                      d.</p>
2	2/27.3	<p><b>Which road sign warns about approaching a road junction?</b></p>	 <p>a.                      b.                      c.                      d.</p>
2	2/28.	<p><b>On the road, pedestrian crossings are:</b></p> <p>the extensions of the sidewalks and the roadsides on the driveway</p> <p>the places outlined with road markings where pedestrians cross the driveway</p> <p>the places indicated with a road sign where pedestrians cross</p> <p>the places indicated by road marking of the "Zebra" type only</p>	
2	2/29.	<p><b>At a road junction, the pedestrians are allowed to cross the driveway along the sidewalk:</b></p> <p>when the extension is outlined by a road marking</p> <p>when the extension is not outlined by a road marking</p> <p>only when it is indicated by a road sign</p> <p>only when the extension is outlined by a road marking of the "Zebra" type</p>	
2	2/30.	<p><b>In this situation, the pedestrian is crossing the driveway on the pedestrian crossing.</b></p> <p>correct</p> <p>incorrect</p>	

2	2/31.	<p><b>When there are no pedestrian crossings in the proximity, the pedestrians are allowed to cross the driveway outside the designated areas:</b></p> <p>on roads outside the populated areas</p> <p>on two-lane, two-way roads in populated areas</p> <p>on the road junctions of the highways</p> <p>on all roads open for public use</p>	
2	2/32	<p><b>This road sign:</b></p> <p>warns the drivers that they are approaching a pedestrian crossing</p> <p>indicates the exact location of the pedestrian crossing</p> <p>indicates the beginning of a road only for pedestrians</p> <p>warns about a road junction with intensive pedestrian traffic</p>	
2	2/33.0	<p><b>Which road sign warns that you are approaching a pedestrian crossing?</b></p> <p>   </p> <p>a.                      b.                      c.                      d.</p>	
2	2/33.1	<p><b>Which road sign warns that you are approaching a place where pedestrians cross the driveway?</b></p> <p>   </p> <p>a.                      b.                      c.                      d.</p>	
2	2/34.0	<p><b>This road sign:</b></p> <p>indicates the exact location of the pedestrian crossing</p> <p>warns the drivers when approaching a pedestrian crossing</p> <p>indicates the beginning of a road only for pedestrians</p> <p>indicates the beginning of a pedestrian route</p>	
2	2/34.1	<p><b>Which road sign indicates the exact location of the pedestrian crossing?</b></p> <p>   </p> <p>a.                      b.                      c.                      d.</p>	
2	2/35.0	<p><b>This road sign warns that you are approaching:</b></p> <p>a railway crossing without barriers</p> <p>a railway overpass</p> <p>a railway station</p> <p>a railway crossing with automatic barriers</p>	
2	2/35.1	<p><b>Which road sign warns that you are approaching a railroad crossing without barriers?</b></p> <p>   </p> <p>a.                      b.                      c.                      d.</p>	
2	2/36.0	<p><b>This road sign warns that you are approaching:</b></p> <p>a railway crossing with barriers</p> <p>a swing bridge</p> <p>a tram line</p> <p>a road closed for public use</p>	



2	2/36.1	<p>Which of the road signs warns that you are approaching a railway crossing with barriers?</p>  <p>a.                      b.                      c.                      d.</p>	
2	2/37.	<p>Which road signs warn that you are approaching a railway crossing?</p>  <p>a.                      b.                      c.                      d.</p>	
2	2/38.0	<p><b>This road sign:</b>  indicates that the railway crossing has two or more tracks  prohibits the crossing without stopping  indicates the location of mandatory stopping  indicates that the railway crossing has a single track</p>	
2	2/38.1	<p>Which road signs indicate that the railroad crossing has two or more tracks?</p>  <p>a.                      b.                      c.                      d.</p>	
2	2/39.0	<p><b>This road sign:</b>  indicates that the railway crossing has a single track  prohibits the entry opposite the sign  warns about a road junction of roads with an equal right of way  indicates that the railroad crossing has two or more tracks</p>	
2	2/39.1	<p>Which sign indicates that the railway crossing has a single track?</p>  <p>a.                      b.                      c.                      d.</p>	
2	2/40.0	<p>On this figure, "a" designates the road sign which indicates that the distance to the railway crossing is:  80 m  160 m  240 m</p>	
2	2/40.1	<p>On this figure, "b" designates the road sign which indicates that the distance to the railway crossing is:  80 m  160 m  240 m</p>	

2		2/40.2	<p><b>On this figure, “c” designates the road sign which indicates that the distance to the railway crossing is:</b></p> <p>80 m 160 m <b>240 m</b></p>	 <p>The diagram shows a road with a dashed center line approaching a railway crossing. On the right side of the road, there are three signs: a triangular warning sign with a train icon, a rectangular sign with a red border and a white background, and another rectangular sign with a red border and a white background. The distance from the road edge to the first rectangular sign is labeled 'a', to the second is 'b', and to the triangular sign is 'c'. A person is walking on the left side of the road, and a train is visible in the distance.</p>
---	--	--------	---	---