

EXECUTIVE AGENCY "ROAD TRANSPORT ADMINISTRATION"

EXAM QUESTIONS FOR CANDIDATES FOR ACQUISITION OF DRIVING LICENSE FROM CATEGORIES AM, A1, A2, A, B1, B AND T

Topic 1: BASIC CONCEPTS

Points Number Question and answers

2	1/1	<p>The road users are:</p> <ul style="list-style-type: none"><input checked="" type="checkbox"/> the drivers<input type="checkbox"/> the vehicles<input checked="" type="checkbox"/> the pedestrians<input checked="" type="checkbox"/> the persons working on the road
2	1/2	<p>The road users are:</p> <ul style="list-style-type: none"><input checked="" type="checkbox"/> the drivers<input checked="" type="checkbox"/> the pedestrians<input type="checkbox"/> the road vehicles<input type="checkbox"/> the motor vehicles
2	2/1	<p>The road users are:</p> <ul style="list-style-type: none"><input checked="" type="checkbox"/> the drivers<input checked="" type="checkbox"/> the passengers<input type="checkbox"/> the vehicles<input type="checkbox"/> the two-wheeled vehicles
2	2/2	<p>The road users are:</p> <ul style="list-style-type: none"><input checked="" type="checkbox"/> the pedestrians<input checked="" type="checkbox"/> the persons working on the road<input type="checkbox"/> the road vehicles<input type="checkbox"/> the self-propelled vehicles
2	2/3	<p>Outside populated areas, in lack of banquette, the persons pushing a bicycle shall be obliged to move on the traffic line:</p> <ul style="list-style-type: none"><input checked="" type="checkbox"/> As they keep close as possible to its right border<input type="checkbox"/> As they keep close as possible to its left border

2	2/6	<p>Which of the listed persons are considered as pedestrians?</p> <p><input checked="" type="checkbox"/> Which push a vehicle without a motor and with a width less than 1 meter</p> <p><input checked="" type="checkbox"/> Which push a bicycle</p> <p><input checked="" type="checkbox"/> Which push a moped or a motorcycle</p> <p><input type="checkbox"/> Which lead riding animals on the roads</p>
2	5/1	<p>A driver with competence for driving of a motor vehicle of category A shall have the right to drive also a vehicle of:</p> <p><input checked="" type="checkbox"/> Category AM</p> <p><input checked="" type="checkbox"/> Category A1</p> <p><input type="checkbox"/> Category B1</p> <p><input type="checkbox"/> Category Tkt</p>
2	6/1	<p>A driver with competence for driving of a motor vehicle of category A1 shall have the right to drive also a vehicle of:</p> <p><input checked="" type="checkbox"/> Category AM</p> <p><input type="checkbox"/> Category Tkt</p> <p><input type="checkbox"/> Category A2</p> <p><input type="checkbox"/> Category A</p>
1	7/1	<p>Is it allowed for a driver holding a license for category "Twt" (wheeled tractor) to ride a moped?</p> <p><input checked="" type="checkbox"/> yes</p> <p><input type="checkbox"/> no</p>
1	7/2	<p>A driver with competence for driving of a motor vehicle of category Tkt (wheeled tractor) shall have the right to drive also:</p> <p><input checked="" type="checkbox"/> Moped</p> <p><input type="checkbox"/> Two-wheel vehicles of category A2</p> <p><input type="checkbox"/> Two-wheel vehicles of category A1</p> <p><input type="checkbox"/> Automobiles of category B1</p>
1	7/3	<p>A driver with competence for driving of a motor vehicle of category Tkt (wheeled tractor) shall have the right to drive also a vehicle of:</p> <p><input checked="" type="checkbox"/> Category AM</p> <p><input type="checkbox"/> Category A1</p> <p><input type="checkbox"/> Category B1</p> <p><input type="checkbox"/> Category C1</p>





2	8/1	<p>A person possessing a driving license for category "B" is allowed to drive a vehicle with maximum permissible mass exceeding 3.5 tons, if the number of the seats, excluding the driver's seat, does not exceed 8.</p> <p><input checked="" type="checkbox"/> wrong</p> <p><input type="checkbox"/> right</p>
2	9/1	<p>Is a driver holding a driving license for category "B" allowed to drive a truck?</p> <p><input checked="" type="checkbox"/> yes, if its maximum permissible mass does not exceed 3.5 tons</p> <p><input type="checkbox"/> yes, when its mass with load does not exceed 3.5 t</p> <p><input type="checkbox"/> yes, when the mass of the load does not exceed 3.5 t</p> <p><input type="checkbox"/> no</p>
2	9/2	<p>Is a driver holding a driving for category "B" allowed to drive a truck, if:</p> <p><input checked="" type="checkbox"/> the maximum permissible mass of the vehicle does not exceed 3.5 tons</p> <p><input type="checkbox"/> the load of the vehicle does not exceed 3.5 tons</p> <p><input type="checkbox"/> the driver has over 5 years of experience</p> <p><input type="checkbox"/> the driver holds a driving license for category "Twt"</p>
2	10/1	<p>A driver with competence for driving of a motor vehicle of category B1 shall have the right to drive also:</p> <p><input checked="" type="checkbox"/> Moped</p> <p><input type="checkbox"/> Motorcycle</p> <p><input type="checkbox"/> Wheeled Tractor</p>
2	11/1	<p>A driver with competence for driving of a motor vehicle of category B shall have the right to drive also a vehicle of:</p> <p><input checked="" type="checkbox"/> Category AM</p> <p><input checked="" type="checkbox"/> Category B1</p> <p><input type="checkbox"/> Category Tkt</p> <p><input type="checkbox"/> Category A1</p>
2	15/2	<p>A composition of motor vehicles of category B with maximal admissible mass over 7,000 kg but not more than 12,000 kg is allowed to be steered with a capacity for:</p> <p><input checked="" type="checkbox"/> Category C1E</p> <p><input type="checkbox"/> Category C1</p> <p><input type="checkbox"/> Category B</p> <p><input type="checkbox"/> Category BE</p>





2	16/2	<p>To a driver with capacity of category BE is allowed to drive a composition of a vehicle with towing vehicle of category B and a trailer with a maximal admissible mass not more than:</p> <p><input checked="" type="checkbox"/> 3500 kg</p> <p><input type="checkbox"/> 2500 kg</p> <p><input type="checkbox"/> 1250 kg</p> <p><input type="checkbox"/> 750 kg</p>
2	18/1	<p>Which of the road vehicles listed below are motor vehicles?</p> <p><input checked="" type="checkbox"/> mopeds</p> <p><input type="checkbox"/> bicycles</p> <p><input checked="" type="checkbox"/> tractors</p> <p><input checked="" type="checkbox"/> trolleybuses</p>
2	18/2	<p>Which of the road vehicles listed below are motor vehicles?</p> <p><input checked="" type="checkbox"/> mopeds</p> <p><input checked="" type="checkbox"/> passenger cars</p> <p><input checked="" type="checkbox"/> tractors</p> <p><input type="checkbox"/> trams</p>
2	18/3	<p>Which of the road vehicles listed below are motor vehicles?</p> <p><input checked="" type="checkbox"/> passenger cars</p> <p><input checked="" type="checkbox"/> tractors</p> <p><input type="checkbox"/> bicycles</p> <p><input type="checkbox"/> trams</p>
2	19/1	<p>The tractor belongs to the group of:</p> <p><input checked="" type="checkbox"/> road vehicles</p> <p><input checked="" type="checkbox"/> motor vehicles</p> <p><input type="checkbox"/> trucks</p> <p><input type="checkbox"/> special purpose vehicles</p>
2	19/2	<p>The tram is a rail vehicle, which:</p> <p><input checked="" type="checkbox"/> belongs to the group of the road vehicles</p> <p><input checked="" type="checkbox"/> is not considered a motor vehicle</p> <p><input type="checkbox"/> belongs to vehicles</p> <p><input type="checkbox"/> belongs to trolleybuses</p>





2	19/3	<p>The tram is a rail vehicle, which belongs to the group of motor vehicles.</p> <p><input checked="" type="checkbox"/> incorrect</p> <p><input type="checkbox"/> correct</p>
---	------	--





2	19/4	<p>Trams equate to:</p> <p><input checked="" type="checkbox"/> the road vehicles</p> <p><input type="checkbox"/> the motor vehicles</p> <p><input type="checkbox"/> the special purpose vehicles</p> <p><input type="checkbox"/> the trolleybuses</p>
---	------	--





1	20/1	<p>Which of the tractors shown below are allowed to use roads open for public use?</p> <p><input checked="" type="checkbox"/> <input checked="" type="checkbox"/> <input type="checkbox"/> <input type="checkbox"/></p> <div>     </div>
---	------	--

2	21/1	<p>Which of the vehicles shown below is an automobile?</p> <p><input checked="" type="checkbox"/> <input checked="" type="checkbox"/> <input type="checkbox"/> <input checked="" type="checkbox"/></p> <div>     </div>
---	------	---

2	21/2	<p>Which of the vehicles shown below is an automobile?</p> <p><input checked="" type="checkbox"/> <input type="checkbox"/> <input checked="" type="checkbox"/> <input checked="" type="checkbox"/></p> <div>     </div>
---	------	---

2	21/3	<p>Which of the vehicles shown below is an automobile?</p> <div> <input checked="" type="checkbox"/> <input checked="" type="checkbox"/> <input checked="" type="checkbox"/> <input type="checkbox"/> </div> <div>     </div>
---	------	--

2	22/1	<p>Which of the vehicles shown below is an automobile?</p> <div> <input checked="" type="checkbox"/> <input checked="" type="checkbox"/> <input checked="" type="checkbox"/> <input type="checkbox"/> </div> <div>     </div>
---	------	--

2	22/2	<p>Which of the vehicles shown below is an automobile?</p> <div> <input checked="" type="checkbox"/> <input type="checkbox"/> <input checked="" type="checkbox"/> <input type="checkbox"/> </div> <div>     </div>
---	------	---

2	24/1	<p>Passenger cars are the vehicles designed for transport of passengers with no more than:</p> <div> <input checked="" type="checkbox"/> 8 seats excluding the seat of the driver <input type="checkbox"/> 6 seats excluding the seat of the driver <input type="checkbox"/> 10 seats excluding the seat of the driver <input type="checkbox"/> 12 seats excluding the seat of the driver </div>
---	------	--

2	25/1	<p>The special purpose vehicles:</p> <div> <input checked="" type="checkbox"/> have specific technical characteristics that allow them to perform functions requiring special configuration or equipment <input type="checkbox"/> are marked with yellow, flashing light <input type="checkbox"/> have blue or red flashing signaling light <input type="checkbox"/> use a special regime of movement </div>
---	------	--

2	26/1	<p>The moped's engine capacity is up to 50 cm³ and the maximum design speed does not exceed 45 km/h.</p> <p><input checked="" type="checkbox"/> correct</p> <p><input type="checkbox"/> incorrect</p>
2	26/2	<p>The moped's engine capacity is up to:</p> <p><input checked="" type="checkbox"/> 50 cm³</p> <p><input type="checkbox"/> 30 cm³</p> <p><input type="checkbox"/> 75 cm³</p> <p><input type="checkbox"/> 125 cm³</p>
2	27/1	<p>The maximum design speed of the moped is not higher than:</p> <p><input checked="" type="checkbox"/> 45 km/h</p> <p><input type="checkbox"/> 50 km/h</p> <p><input type="checkbox"/> 55 km/h</p> <p><input type="checkbox"/> 60 km/h</p>
2	28/1	<p>A combination of road vehicles means:</p> <p><input checked="" type="checkbox"/> mechanically coupled road vehicles participating in the traffic as a unit</p> <p><input checked="" type="checkbox"/> a motor vehicle with a trailer</p> <p><input checked="" type="checkbox"/> a motor vehicle towing a trailer</p> <p><input type="checkbox"/> vehicles fitted with additional equipment</p>
2	28/2	<p>A combination of road vehicles means:</p> <p><input checked="" type="checkbox"/> a motor vehicle with a trailer</p> <p><input checked="" type="checkbox"/> a motor vehicle with a semi-trailer</p> <p><input checked="" type="checkbox"/> a motor vehicle towing another damaged motor vehicle</p> <p><input type="checkbox"/> vehicles fitted with additional equipment</p>
2	29/1	<p>The laden mass of the vehicle:</p> <p><input checked="" type="checkbox"/> includes the mass of the vehicle</p> <p><input type="checkbox"/> does not include the mass of the driver</p> <p><input type="checkbox"/> does not include the mass of passengers</p> <p><input checked="" type="checkbox"/> includes the mass of the load</p>

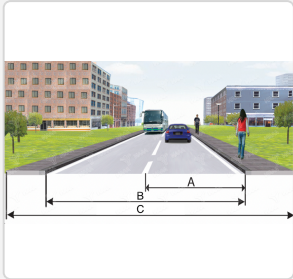
2	29/2	<p>The “maximum permissible mass” of the vehicle is:</p> <p><input checked="" type="checkbox"/> the maximum laden mass as specified by the competent authorities</p> <p><input type="checkbox"/> the maximum laden mass stated by the manufacturer</p> <p><input type="checkbox"/> the maximum unladen mass of the vehicle</p> <p><input type="checkbox"/> the permitted load capacity of the vehicle</p>
2	30/1	<p>Two-wheel vehicle, with working volume of the engine up to 50 cm³ and constructive maximum speed over 45 km/h, belongs to:</p> <p><input checked="" type="checkbox"/> Category A</p> <p><input type="checkbox"/> Category B1</p> <p><input type="checkbox"/> Category B</p> <p><input type="checkbox"/> Category AM</p>
2	31/2	<p>In order to belong to category “A”, the mass of the motor vehicle with three wheels must not exceed:</p> <p><input checked="" type="checkbox"/> 400 kg</p> <p><input type="checkbox"/> 550 kg</p> <p><input type="checkbox"/> 750 kg</p>
2	32/1	<p>What is the maximum power value of motorcycles of category A1?</p> <p><input checked="" type="checkbox"/> 11 kW</p> <p><input type="checkbox"/> 7 kW</p> <p><input type="checkbox"/> 17 kW</p> <p><input type="checkbox"/> 25 kW</p>
2	33/1	<p>What is the maximum value of the working volume of the engine of the motorcycles of category A1?</p> <p><input checked="" type="checkbox"/> 125 cm³</p> <p><input type="checkbox"/> 75 cm³</p> <p><input type="checkbox"/> 175 cm³</p> <p><input type="checkbox"/> 250 cm³</p>
2	33/2	<p>Which of the listed indicators is used to identify motorcycles, which belong to category A1?</p> <p><input checked="" type="checkbox"/> The working volume of the engine</p> <p><input checked="" type="checkbox"/> The power of the engine</p> <p><input checked="" type="checkbox"/> The power/weight ratio</p> <p><input type="checkbox"/> The location of the wheels relative to the mean axis of the motorcycle</p>

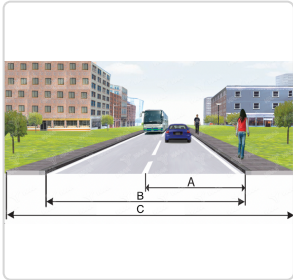
2	33/3	<p>Which of the following ratios is used in determining the motorcycles, which belong to category A1?</p> <p><input checked="" type="checkbox"/> Power/weight</p> <p><input type="checkbox"/> Power/volume of the engine</p> <p><input type="checkbox"/> Volume of the engine/weight</p>
2	34/1	<p>What is the maximum unladen mass of the motor vehicles of category B1, intended for transportation of goods?</p> <p><input checked="" type="checkbox"/> 550 kg</p> <p><input type="checkbox"/> 1250 kg</p> <p><input type="checkbox"/> 750 kg</p> <p><input type="checkbox"/> 400 kg</p>
2	34/2	<p>The automobiles of category B1, intended for transportation of passengers, have unladen mass not more than:</p> <p><input checked="" type="checkbox"/> 400 kg</p> <p><input type="checkbox"/> 550 kg</p> <p><input type="checkbox"/> 750 kg</p> <p><input type="checkbox"/> 900 kg</p>
2	35/1	<p>Vehicles of Category "B" include trucks with maximum permissible mass not exceeding:</p> <p><input checked="" type="checkbox"/> 3500 kg</p> <p><input type="checkbox"/> 2500 kg</p> <p><input type="checkbox"/> 4500 kg</p> <p><input type="checkbox"/> 7500 kg</p>
2	36/1	<p>The number of seats, excluding the driver's seat, in vehicles used for the transport of passengers belonging to vehicles of category "B", must not exceed:</p> <p><input checked="" type="checkbox"/> 8 seats</p> <p><input type="checkbox"/> 6 seats</p> <p><input type="checkbox"/> 9 seats</p> <p><input type="checkbox"/> 12 seats</p>
2	37/1	<p>The traffic rules in populated areas shall apply:</p> <p><input checked="" type="checkbox"/> after the sign designating the beginning of the populated area</p> <p><input type="checkbox"/> from the first building in the area</p> <p><input type="checkbox"/> in all sections of the road with pedestrians traffic</p>

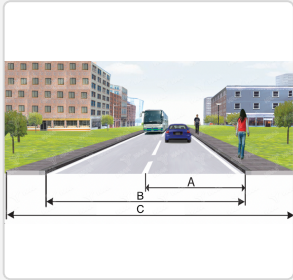
2	38/1	<p>Which of the following rules apply to the traffic in populated areas?</p> <p><input type="checkbox"/> the car passengers may not use the seat belts</p> <p><input checked="" type="checkbox"/> the pedestrians may cross the driveway outside the pedestrian walkways in the two-lane and two-way roads</p> <p><input checked="" type="checkbox"/> parking is allowed on the driveway</p> <p><input checked="" type="checkbox"/> parking is allowed in the designated areas on the sidewalks</p>
---	------	--

2	38/2	<p>Which of the rules listed below apply to the traffic in populated areas?</p> <p><input checked="" type="checkbox"/> if there are no other restrictions, the speed limit in the populated areas should be observed</p> <p><input checked="" type="checkbox"/> parking is allowed on the driveway</p> <p><input type="checkbox"/> no restrictions on the use of sound signals</p> <p><input type="checkbox"/> the driver is not obliged to use a seat belt</p>
---	------	--



2	38/3	<p>Which of the following rules apply to the traffic in the populated areas?</p> <p><input checked="" type="checkbox"/> parking is allowed on the driveway</p> <p><input checked="" type="checkbox"/> parking is allowed in the designated areas on the sidewalks</p> <p><input type="checkbox"/> parking is prohibited on the driveway</p> <p><input type="checkbox"/> no restriction for parking on the sidewalks</p>
---	------	--



2	39/1	<p>Which part of the road shown in the diagram is designated with the letter "A"?</p> <p><input checked="" type="checkbox"/> the road lane</p> <p><input type="checkbox"/> the roadway</p> <p><input type="checkbox"/> the driveway</p>	
---	------	--	---

2	39/2	<p>Which part of the road shown in the diagram is designated with the letter "B"?</p> <p><input checked="" type="checkbox"/> the driveway</p> <p><input type="checkbox"/> the roadway</p> <p><input type="checkbox"/> the road lane</p>	
---	------	--	---

2	39/3	<p>Which part of the road shown in the diagram is designated with the letter "C"?</p> <p><input checked="" type="checkbox"/> the roadway</p> <p><input type="checkbox"/> the driveway</p> <p><input type="checkbox"/> the road lane</p>	
---	------	--	---

2	40/1	<p>The driveway includes:</p> <p><input checked="" type="checkbox"/> the road lanes</p> <p><input type="checkbox"/> the sidewalks</p> <p><input type="checkbox"/> the roadside</p> <p><input type="checkbox"/> the driveway islands</p>
2	41/1	<p>The roadway includes:</p> <p><input checked="" type="checkbox"/> the roadside</p> <p><input type="checkbox"/> the drainage ditches</p> <p><input checked="" type="checkbox"/> the driveways</p> <p><input checked="" type="checkbox"/> the driveway islands</p>
2	42/1	<p>The sidewalk is a part of:</p> <p><input checked="" type="checkbox"/> the roadway</p> <p><input type="checkbox"/> the driveway</p> <p><input type="checkbox"/> the rightmost lane</p> <p><input type="checkbox"/> the dividing line</p>
2	42/2	<p>The roadside is a part of:</p> <p><input checked="" type="checkbox"/> the roadway</p> <p><input type="checkbox"/> the driveway</p> <p><input type="checkbox"/> the rightmost lane</p> <p><input type="checkbox"/> the dividing line</p>
2	43/1	<p>"Boundary of the driveway" is the line:</p> <p><input checked="" type="checkbox"/> outlining the "BUS" lane</p> <p><input checked="" type="checkbox"/> outlining the end of the driveway</p> <p><input checked="" type="checkbox"/> outlining the islands of the driveway</p> <p><input type="checkbox"/> which separates the road lanes</p>
2	43/2	<p>"Boundary of the driveway" is the line drawn or not drawn by a road marking that separates the driveway from the other structural elements of the roadway.</p> <p><input checked="" type="checkbox"/> correct</p> <p><input type="checkbox"/> incorrect</p>
2	43/3	<p>"Boundary of the driveway" is the line drawn or not drawn by a road marking that separates the road lanes.</p> <p><input checked="" type="checkbox"/> incorrect</p> <p><input type="checkbox"/> correct</p>

2	43/4	<p>"Boundary of the driveway" is the line drawn or not drawn by a road marking that separates:</p> <ul style="list-style-type: none"> <input checked="" type="checkbox"/> the driveway from other structural elements of the roadway <input type="checkbox"/> the roadways <input type="checkbox"/> the road lanes 	
2	44/1	<p>The line, which outlines the "BUS" lane, is the boundary of the driveway.</p> <ul style="list-style-type: none"> <input checked="" type="checkbox"/> correct <input type="checkbox"/> incorrect 	
2	45/1	<p>The dividing line is the longitudinal part of the road that:</p> <ul style="list-style-type: none"> <input checked="" type="checkbox"/> divides the road into separate driveways <input type="checkbox"/> divides the road into separate traffic lanes <input type="checkbox"/> separates the driveway from the other elements of the road 	
2	46/1	<p>Visibility is reduced in case of:</p> <ul style="list-style-type: none"> <input checked="" type="checkbox"/> fog <input checked="" type="checkbox"/> pouring rain <input checked="" type="checkbox"/> heavy snowfall <input type="checkbox"/> curve 	
2	47/1	<p>Visibility is reduced in case of:</p> <ul style="list-style-type: none"> <input checked="" type="checkbox"/> dusk <input checked="" type="checkbox"/> dust <input type="checkbox"/> steep slopes <input type="checkbox"/> curves 	
2	47/2	<p>Visibility is reduced in case of:</p> <ul style="list-style-type: none"> <input checked="" type="checkbox"/> dusk <input checked="" type="checkbox"/> dust <input checked="" type="checkbox"/> smoke <input type="checkbox"/> obstacles that hinder visibility 	

2	48/1	<p>The visibility on the figure is:</p> <p><input checked="" type="checkbox"/> reduced</p> <p><input type="checkbox"/> limited</p>	
2	49/1	<p>The visibility is limited in case of:</p> <p><input checked="" type="checkbox"/> steep slopes</p> <p><input checked="" type="checkbox"/> curves</p> <p><input type="checkbox"/> dust</p> <p><input checked="" type="checkbox"/> roadside objects which limit the visibility</p>	
2	50/1	<p>The visibility is limited in case of:</p> <p><input checked="" type="checkbox"/> steep slopes</p> <p><input checked="" type="checkbox"/> curves</p> <p><input type="checkbox"/> dusk</p> <p><input type="checkbox"/> fog</p>	
2	50/2	<p>The visibility is limited in case of:</p> <p><input checked="" type="checkbox"/> obstacles that hinder the visibility</p> <p><input checked="" type="checkbox"/> roadside objects that limit the visibility</p> <p><input type="checkbox"/> pouring rain</p> <p><input type="checkbox"/> heavy snowfall</p>	
2	50/3	<p>The visibility is limited in case of:</p> <p><input checked="" type="checkbox"/> steep slopes</p> <p><input checked="" type="checkbox"/> obstacles that hinder the visibility</p> <p><input checked="" type="checkbox"/> roadside objects that limit the visibility</p> <p><input type="checkbox"/> dust</p>	
2	51/1	<p>The visibility on the figure is:</p> <p><input checked="" type="checkbox"/> limited</p> <p><input type="checkbox"/> reduced</p>	

2	52/1	<p>Three-wheel motor vehicle driven by an electric motor with a constructive maximal speed not more than 45 km/h, is steered with capacity for category AM, if the maximum continuous rated output of the engine is:</p> <p><input type="checkbox"/> Not more than 3 kW</p> <p><input checked="" type="checkbox"/> Not more than 4 kW</p> <p><input type="checkbox"/> Not more than 5 kW</p> <p><input type="checkbox"/> Not more than 6 kW</p>
2	52/2	<p>To the category AM belong vehicles with a constructive maximal speed up to 45 km/h and internal combustion engines with working volume of 50 cm³, which are:</p> <p><input checked="" type="checkbox"/> With two wheels</p> <p><input checked="" type="checkbox"/> With three wheels</p> <p><input checked="" type="checkbox"/> With four wheels and unladen mass not more than 350 kg</p> <p><input type="checkbox"/> With four wheels and unladen mass not more than 400 kg</p>
2	53/1	<p>Three-wheel motor vehicles with a power greater than 15 kW are steered with capacity for:</p> <p><input type="checkbox"/> Category AM</p> <p><input type="checkbox"/> Category A1</p> <p><input checked="" type="checkbox"/> Category A</p> <p><input type="checkbox"/> Category B1</p>
2	53/2	<p>The vehicles of subcategory "B1" have unladen mass not greater than:</p> <p><input checked="" type="checkbox"/> 550 kg</p> <p><input type="checkbox"/> 1250 kg</p> <p><input type="checkbox"/> 750 kg</p> <p><input type="checkbox"/> 400 kg</p>
2	54/1	<p>Three-wheel motor vehicles (with symmetrically located wheels), with an engine with a working volume of the cylinder over 50 cm³ and/or with constructive maximal speed, higher than 45 km/h are controlled:</p> <p><input type="checkbox"/> With capacity for category AM</p> <p><input type="checkbox"/> With capacity for category A1</p> <p><input checked="" type="checkbox"/> With capacity for category A</p> <p><input type="checkbox"/> With capacity for category B1</p>
2	54/2	<p>With capacity for category A1 can be steered three-wheel motor vehicles with power, which does not exceed:</p> <p><input type="checkbox"/> 11 kW</p> <p><input type="checkbox"/> 13 kW</p> <p><input checked="" type="checkbox"/> 15 kW</p> <p><input type="checkbox"/> 9 kW</p>

2	56/1	<p>What is the maximum power of the engine of a motorcycle, which can be steered with capacity for category A2?</p> <p><input checked="" type="checkbox"/> 35 kW</p> <p><input type="checkbox"/> 25 kW</p> <p><input type="checkbox"/> 15 kW</p> <p><input type="checkbox"/> 11 kW</p>
2	56/2	<p>How much is the maximum working volume of the internal combustion engine of a motorcycle, which can be steered with capacity for category A2?</p> <p><input checked="" type="checkbox"/> There is no restriction</p> <p><input type="checkbox"/> 125 cm³</p> <p><input type="checkbox"/> 175 cm³</p> <p><input type="checkbox"/> 250 cm³</p>