



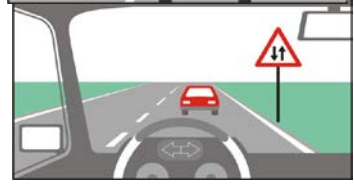
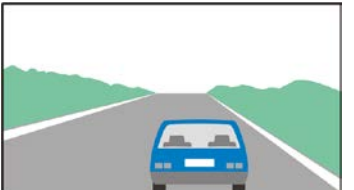

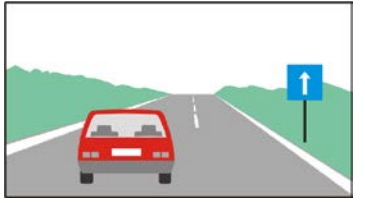

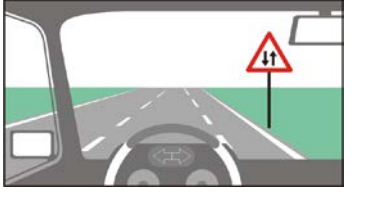
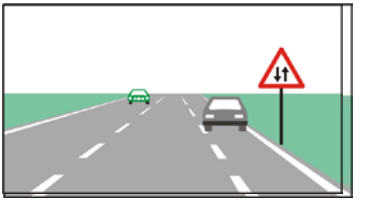
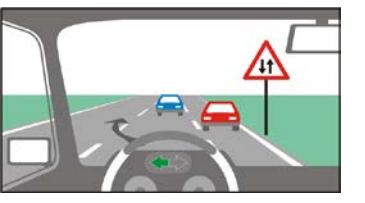
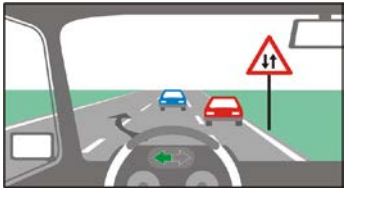

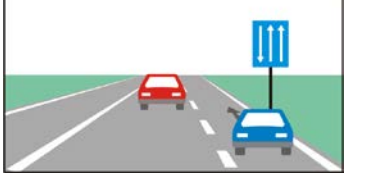

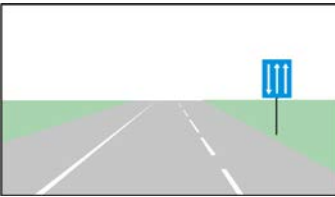



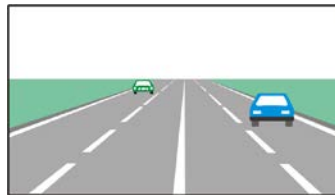
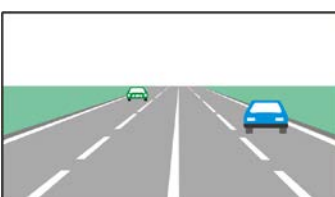



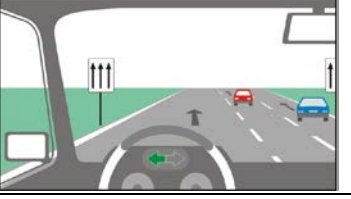



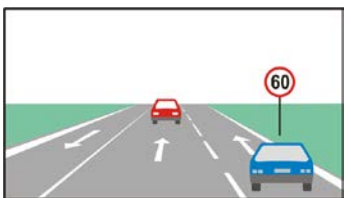



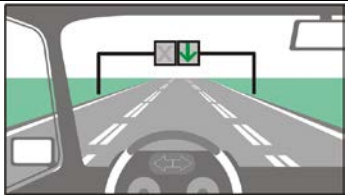
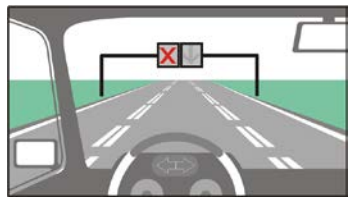
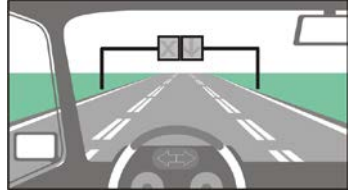
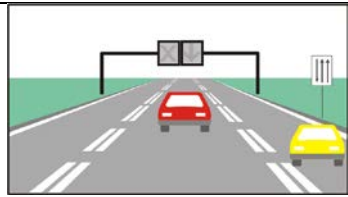
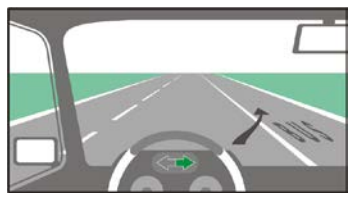

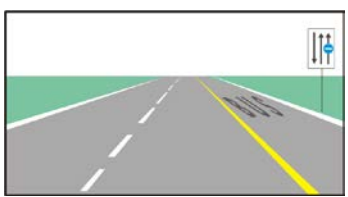

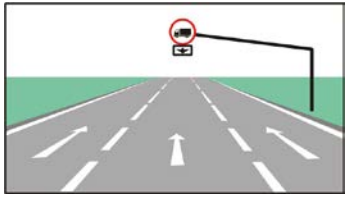
Theme: 5. LOCATION OF THE NON-RAIL ROAD VEHICLES ON THE ROAD

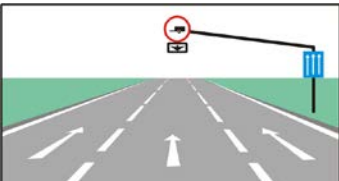



points	K	№	Question, answers	Figure
3		5/1.0	<p>In this situation, the location of the vehicle on the driveway is:</p> <p>correct incorrect</p>	
3		5/1.1	<p>In this situation, I must drive:</p> <p>in the right road lane in the road lane, which is more convenient for me in the left road lane</p>	
3		5/2.0	<p>Which passenger car is moving incorrectly on the roadway?</p> <p>the blue car the red car both cars</p>	
3		5/2.1	<p>On a two-way road with one road lane for each direction, the vehicles must move:</p> <p>in the right road lane in the middle of the road in the left road lane</p>	
3		5/3.	<p>In this situation:</p> <p>a section of the road with two-way traffic follows the left side of the roadway is for the vehicles of the oncoming traffic the oncoming passenger cars have right of way we are entering a section of the road which is prohibited for passing each other</p>	
3		5/4.	<p>On a two-lane two-way road, entering the lane of the oncoming traffic is:</p> <p>allowed, in case of overtaking allowed, in case of going around prohibited in all cases allowed, whenever the lane is free</p>	
3		5/6.	<p>On a two-lane two-way road, the driver must drive:</p> <p>possibly in the rightmost part of the driveway, if the road lanes are not designated by road marking in the right road lane, if the road lanes are designated by road marking in the road lane which is more convenient for him in the left road lane, whenever it is free</p>	
3		5/7.	<p>The position of the red passenger car, which is moving outside the populated area is:</p> <p>incorrect correct</p>	



3		5/8.	<p>On this road, outside the populated areas, the driver must drive:</p> <p>possibly in the rightmost part of the driveway, if the road lanes are not designated by a road marking</p> <p>in the right road lane, if the road lanes are designated by a road marking</p> <p>in the road lane which is more convenient for him</p> <p>in the left road lane, whenever it is free</p>	
3		5/9.	<p>In this situation, the position of the passenger car on the driveway is:</p> <p>incorrect</p> <p>Correct</p>	
3		5/10.	<p>On a two-way roadway with three road lanes, driving in the middle lane is:</p> <p>allowed while overtaking and bypassing</p> <p>allowed, whenever free</p>	
3		5/11.0	<p>Entry into the leftmost road lane of a three-lane two-way road is:</p> <p>prohibited</p> <p>allowed while overtaking and bypassing</p> <p>allowed, if it creates no danger to the traffic</p> <p>allowed when the road lane is free</p>	
3		5/11.1	<p>In this situation, the entry into the leftmost road lane is:</p> <p>prohibited</p> <p>allowed only when overtaking</p> <p>allowed whenever the lane is free</p> <p>allowed, if it creates no danger to the traffic</p>	
3		5/11.2	<p>Entry into the leftmost road lane of a three-lane two-way road is:</p> <p>prohibited</p> <p>allowed while overtaking</p> <p>allowed when it is free</p> <p>allowed in case of bumps on the driveway</p>	
3		5/12.	<p>After overtaking the blue passenger car, I will continue driving in the middle road lane.</p> <p>incorrect</p> <p>correct</p>	
3		5/13.	<p>Which passenger car is moving correctly on this road, outside the populated areas?</p> <p>the blue car</p> <p>the red car</p> <p>both cars</p>	

3		5/14.0	<p>In this situation, on a road outside a populated area, the drivers are allowed:</p> <p>to drive in the rightmost free road lane</p> <p>to drive in the middle road lane if the right one is occupied</p> <p>to drive in the road lane which is most convenient for them</p> <p>to drive in the middle road lane, whenever it is free</p>	
3		5/14.1	<p>In this situation, on a road outside a populated area, the drivers are allowed:</p> <p>to drive in the rightmost free road lane</p> <p>to drive in the middle road lane when the right one is occupied</p> <p>to enter the middle road lane when overtaking</p> <p>to enter the leftmost road lane when overtaking</p>	
3		5/15.	<p>In this situation the position of the red passenger car on the driveway is:</p> <p>incorrect</p> <p>correct</p>	
3		5/16.	<p>In this situation, the driver is allowed:</p> <p>to enter into the middle road lane when overtaking</p> <p>to enter into the middle road during bypassing</p> <p>to drive into the road lane which is most convenient for him</p> <p>to enter the leftmost road lane when overtaking</p>	
3		5/17.	<p>This sign indicates that the section of road beyond the sign:</p> <p>has a middle lane for overtaking in the indicated direction</p> <p>one-way traffic</p> <p>overtaking is prohibited</p>	
3		5/18.0	<p>In this situation, the entry into the road lanes of the oncoming traffic is:</p> <p>prohibited</p> <p>allowed without restrictions</p> <p>allowed, but only when overtaking</p> <p>allowed when they are free</p>	
3		5/18.1	<p>The entry into an oncoming traffic lane of a four-lane two-way road is:</p> <p>prohibited</p> <p>allowed without restrictions</p> <p>allowed for overtaking</p> <p>allowed for bypassing</p>	
3		5/19.0	<p>Which of the following conditions should be met to allow the driver to use the road lane which is most convenient for him, when driving in a populated area?</p> <p>the roadway should have two or more road lanes for movement in one direction</p> <p>the road lanes should be designated by road marking</p> <p>the permitted speed limit must be not higher than 80 km/h</p> <p>the total vehicle mass should not exceed 3.5 tons</p>	

3	5/19.1	<p>Which of the following conditions should be met to allow the driver to use the road lane which is most convenient for him, when driving in a populated area?</p> <p>the roadway should have two and more road lanes for one-way traffic</p> <p>the number of road lanes and traffic directions are designated by a road sign</p> <p>the permitted speed limit should be not higher than 80 km/h</p> <p>the road should have two driveways</p>	
3	5/19.2	<p>Which of the following conditions should be met to allow the driver to use the road lane which is most convenient for him, when driving in a populated area?</p> <p>the roadway should have two or more road lanes for one-way traffic</p> <p>the permitted speed limit should be not higher than 80 km/h</p> <p>the roadway should have no less than three road lanes for one-way traffic</p> <p>the permitted speed limit should be not higher than 50 km/h</p>	
3	5/20.	<p>In this situation, are you obliged to drive into the rightmost road lane if you cannot overtake both passenger cars?</p> <p>no</p> <p>yes</p>	
3	5/21.	<p>In this situation:</p> <p>it is allowed to use the road lane which is most convenient for me</p> <p>I must go into the rightmost part of the driveway</p> <p>I must drive in the possibly rightmost free road lane</p>	
3	5/22.	<p>In this situation, the position of the red passenger car on the driveway is:</p> <p>correct</p> <p>incorrect</p>	
3	5/23.0	<p>Which passenger car is moving correctly in this road in a populated area?</p> <p>the blue car only</p> <p>the red car only</p> <p>both cars</p>	
3	5/23.1	<p>In this situation, the driver of the red passenger car:</p> <p>may continue driving in the left road lane</p> <p>may use a road lane which is more convenient for him</p> <p>must go into the right road lane</p> <p>must drive in the rightmost free road lane</p>	
3	524.	<p>The location of the vehicle on the roadway is:</p> <p>correct</p> <p>incorrect</p>	

3		5/25.	<p>In this situation, I will not commit a violation, if:</p> <p>I go into the right road lane</p> <p>I continue to drive in the same road lane</p> <p>I go into the left road lane</p> <p>I stop before the traffic-lights in the lane over which it is positioned</p>	
3		5/26.	<p>In this situation, I will commit a violation, if:</p> <p>I continue driving in the same road lane</p> <p>I go into the left road lane</p> <p>I stop before the traffic lights in the lane, over which it is positioned</p> <p>I go into the right road lane</p>	
3		5/27.	<p>In this situation:</p> <p>I must go into the right road lane</p> <p>I must go into the left road lane</p> <p>I can continue driving in the same road lane</p>	
3		5/28.	<p>In this situation, the driver of the red passenger car is allowed:</p> <p>to continue its driving in the same road lane</p> <p>to go into the right road lane</p> <p>to go into the left road lane</p>	
3		5/29.	<p>Is it allowed to enter into and drive in the BUS lane?</p> <p>no</p> <p>yes</p>	
3		5/30.0	<p>In this situation, the entry into the BUS lane is allowed for:</p> <p>vehicles for regular public transport</p> <p>stopping for a stay of all buses</p> <p>the movement of a damaged motor vehicle</p> <p>movement of slow-moving motor vehicles</p>	
3		5/30.1	<p>Which road vehicles are allowed to move in the BUS lane beyond this sign?</p> <p>the road vehicles for regular public transport</p> <p>all buses</p> <p>the taxis</p> <p>the slow-moving vehicles</p>	
3		5/31.	<p>This road sign designates:</p> <p>a road lane for the vehicles for regular public transport only</p> <p>a driveway for the vehicles for regular public transport only</p> <p>the automobile road</p> <p>the road for movement of buses only</p>	
3		5/32.	<p>In this situation, which road vehicles are allowed to move in the middle road lane:</p> <p>buses</p> <p>passenger cars</p> <p>trucks with a maximum permissible mass exceeding 3.5 tons</p> <p>trucks with a maximum permissible mass up to 3.5 tons</p>	

3		5/33.	<p>In this situation, the middle road lane is:</p> <p>allowed for movement of buses with trailers allowed for movement of passenger cars with trailers prohibited for movement of trucks with trailers prohibited for movement of trucks with semi-trailers</p>	
3		5/34.	<p>On a road with three road lanes for one-way movement indicated by a road sign, movement is prohibited in the leftmost lane for:</p> <p>vehicles which cannot reach the maximum speed for the road vehicles, which are prohibited to reach the allowed speed for the road vehicles, the drivers of which have less than 1 year experience</p>	
3		5/35.	<p>In this situation, the movement in the leftmost road lane is prohibited for:</p> <p>passenger cars with trailers of over 750 kg motorcycles mopeds all goods vehicles</p>	
3		5/36.	<p>Which of the following conditions must be present so that moped riders could use the roadside?</p> <p>the roadside must be located on the right, in the direction of the movement and must be suitable for this purpose If there is not a specially designated road lane for them If they do not obstruct the other road users If the roadside is designated by a road sign</p>	
3		5/37.	<p>The moped riders may use the roadside, which:</p> <p>is located on the right, in the direction of movement is located on the left, in the direction of movement is more convenient for them, no matter which side of the road</p>	
3		5/38.	<p>Which vehicles are allowed to move on the roadside?</p> <p>mopeds bicycles motorcycles vehicles with maximum permissible mass of up to 1.5 tons</p>	
3		5/39.	<p>If there is a road lane for slow- moving road vehicles designated with a road sign, the drivers of such road vehicles:</p> <p>are obliged to use this lane use this road lane when it is free only are not obliged to use it</p>	
2		5/40.0	<p>In this situation, the movement in the road lane designated with a road sign for slow- moving road vehicles is:</p> <p>allowed for vehicles designated with the identification sign "slow- moving road vehicles" allowed for passenger cars that cannot move at a speed above 30 km/h prohibited for tractors prohibited for trucks</p>	

2		5/40.1	<p>In this situation, the movement in the road lane designated with a road sign for slow- moving road vehicles is:</p> <p>allowed for vehicles designated with an identification sign "slow-moving road vehicles"</p> <p>allowed for cars that cannot move at a speed above 30 km/h</p> <p>prohibited for bicycles</p> <p>prohibited for mopeds</p>	
2		5/41	<p>In this situation, the driver of a slow- moving road vehicle:</p> <p>is obliged to use the rightmost road lane</p> <p>may use the middle road lane while bypassing</p> <p>may use the leftmost road lane while turning</p> <p>may use the leftmost road lane while overtaking</p>	
2		5/42.	<p>The driver of a slow- moving road vehicle is obliged to drive in the rightmost road lane, unless while:</p> <p>turning</p> <p>bypassing</p> <p>overtaking</p>	
2		5/43.	<p>In this situation is it allowed to move along the tram lines in order to overtake the truck?</p> <p>yes</p> <p>no</p>	